
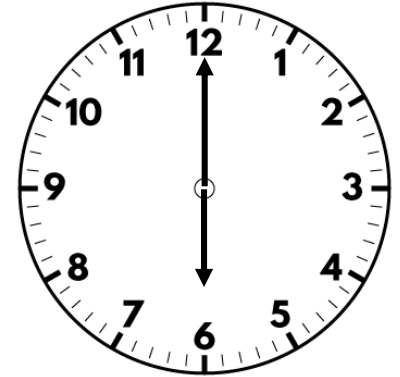





1) Name the 2D shape. 



2) How many films are there on Sunday?

| Day | | Total films |
|----------|---|-------------|
| Saturday |  | |
| Sunday |  | |

Key

 = 5 films

3) What is $30 \div 5$?

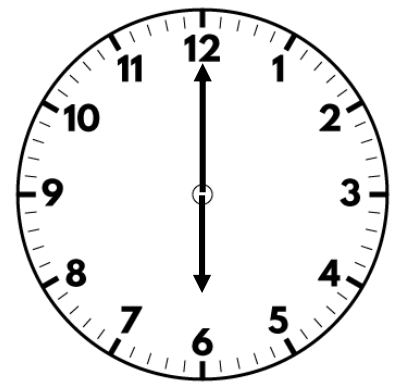
4) How many tens are there in 42?

Flashback 4



1) Name the 2D shape.




pentagon



2) How many films are there on Sunday?

| Day | | Total films |
|----------|---|-------------|
| Saturday |  | |
| Sunday |  | 15 |

Key

 = 5 films

3) What is $30 \div 5$? 6

4) How many tens are there in 42? 4